


Explore It!

A popular beach erodes 4 inches per year on average.




Lesson 1-6
Multiply Integers

Go Online | PearsonRealize.com

I can...
multiply integers.

A. How many years will it take for the coastline to erode one foot?

B. The number line below shows the expected change in the coastline as years pass. How could you use the number line to show the erosion after 10 years?



Focus on math practices

Be Precise What expression could you use to represent the change in the coastline in 5 years?

39

Essential Question How do the signs of factors affect their product?

Lesson 1-6
Multiply Integers


Go Online | PearsonRealize.com

I can...
multiply integers.

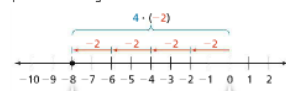
EXAMPLE 1 **Multiply a Negative Integer by a Positive Integer**

While playing a board game, unlucky Lawrence had to move back 2 spaces for 4 turns in a row. What integer represents his change in position?

Model with Math What integer can you use to represent the number of spaces Lawrence had to move back each turn?



Use a number line to represent the change in position on the game board.



-8 represents the change in position on the board. 0 represents the starting position.

The total change in position on the board is -8. Lawrence had to move back 8 spaces.

Use multiplication and properties of operations to show why $4 \cdot (-2) = -8$.

$4 \cdot (-2 + 2) = 0$

$4 \cdot (-2) + 4 \cdot 2 = 0$

$4 \cdot (-2) + 8 = 0$

$7 + 8 = 0$

You know that opposites add to 0, so $-8 + 8 = 0$.

So, $4 \cdot (-2) = -8$.

Generalize A rule for multiplication of integers is: **positive · negative = negative**.

Try It!

A race car game takes 6 points from a player each time the player hits a cone. What integer represents the change in total points if the player hits 10 cones?

$10 \cdot \square = \square$

The change in total points is \square .

Convince Me! Could the product of a positive integer and a negative integer be positive? Explain.

40 1-6 Multiply Integers

EXAMPLE 2 Multiply a Positive Integer by a Negative Integer

What is the balloon's change in elevation in 3 minutes?
 $-500 \cdot 3$
 $-3 \cdot (-500)$
 $= -1,500$

Write an expression to represent the change in elevation.
 $3 \cdot -500$

The change in elevation for the balloon is $-1,500$ feet.

Generalize A rule for multiplication of integers is: **negative** \cdot **positive** = **negative**.

EXAMPLE 3 Multiply a Negative Integer by a Negative Integer

a. Use a number line to represent $-3 \cdot (-10)$.

$3 \cdot (-10) = -30$
 $-(3 \cdot (-10))$ is the opposite of $3 \cdot (-10)$.
 So, $-3 \cdot (-10) = 30$.

Opposites are the same distance from 0, but on opposite sides of 0.

b. Use multiplication and properties of operations to show why $-3 \cdot (-10) = 30$.

$-3 \cdot (-10 + 10) = 0$
 $-3 \cdot (-10) + -3 \cdot 10 = 0$
 $-3 \cdot (-10) + (-30) = 0$
 $? + (-30) = 0$
 So, $-3 \cdot (-10) = 30$.

Use additive inverses and the Zero Property of Multiplication to write a multiplication problem.
 You know that opposites add to 0, so $30 + (-30) = 0$.

Generalize A rule for multiplication of integers is: **negative** \cdot **negative** = **positive**.

Try It!
 Find each product.
 a. $-7 \cdot (-2)$ b. $7 \cdot (-13)$ c. $-6 \cdot 8$ d. $(-1) \cdot (-1)$

Go Online | PearsonRealize.com 1-6 Multiply Integers 41

KEY CONCEPT

When multiplying two integers, the sign of the product depends on the sign of the factors.

If the signs of the factors are the **same**, the product is **positive**.
 $7 \cdot 3 = 21$ $-7 \cdot -3 = 21$

If the signs of the factors are **different**, the product is **negative**.
 $-4 \cdot 5 = -20$ $4 \cdot (-5) = -20$

** doesn't matter which number is larger*

Do You Understand?

- Reasoning Question** How do the signs of factors affect their product?
- Construct Arguments** What is the sign of the product if you multiplied three negative integers? Explain your answer.
- Reasoning** Explain why the product of two negative integers is not negative. Use $(-1)(-1)$ as an example.
- Use Structure** Is the product the same when multiplying $22 \times (-5)$ and multiplying $(-5) \times 22$? Explain.

Do You Know How?

- Represent $2 \cdot (-3)$ on the number line.
- Which of these products is negative? Select all that apply.
 $-8 \cdot (-3)$ +
 $-2 \cdot 8$ +
 $0 \cdot (-2)$ = 0
 $15 \cdot (-5)$ +
 $-8 \cdot (-9)$ +
- Find each product.
 a. $-9 \cdot (-4)$ b. $-7 \cdot 12$
 c. $8 \cdot (-8)$ d. $9 \cdot 15$
- A game show contestant starts a game by answering two questions incorrectly. Each incorrect answer costs the contestant \$600. ~~One~~ product of two integers to show the point total that would appear for the contestant.

$-600 + -600 = \$-1200$
 $2(-600) = -\$1200$

Name: _____

Practice & Problem Solving

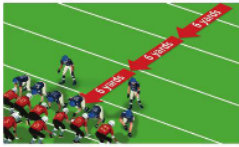
In 9–14, multiply.

9. $(-6) \cdot (-2)$ 10. $4 \cdot (-8)$

11. $7 \cdot (-5)$ 12. $-5 \cdot 2$

13. $-1 \cdot (-24)$ 14. $(5) \cdot (-9) \cdot (-2)$

15. A football team lost the same number of yards on each of 3 consecutive plays. What is the total change in yards from where the team started?



16. a. Find the product.
 $-41 \cdot (-1)$

b. **Construct Arguments** Describe how you use the properties of multiplication to find the product.

17. Alex is working to simplify $5 \cdot (-8) \cdot 2$.

a. What is the product?
 -80

b. Suppose Alex found the opposite of the correct product. Describe an error he could have made that resulted in that product.
 $error = +80$

Handwritten work for 17:

$$+5 \cdot (-8) \cdot (+2)$$

$$(-40) \cdot (+2)$$

$$-80$$

Go Online | PearsonRealize.com 1-6 Multiply Integers 43

18. Which product is greater, $(-4) \cdot (-6)$ or $(-7) \cdot (-8)$? Explain.

19. **Make Sense and Persevere** While playing a board game, Cecilia had to move back 6 spaces 9 times. What integer represents Cecilia's movement on the board for those 9 turns?


20. Anya makes withdrawals from and deposits into her bank account.

a. What integer represents the change in the amount in her account if Anya withdraws \$12 once each day for four days?

b. What integer represents the change in the amount in her account if Anya deposits \$12 once each day for four days?


c. **Look for Relationships** Explain the difference between the integer for the withdrawals and the integer for the deposits.

21. **Higher Order Thinking** A gold mine has two elevators, one for equipment and one for miners. One day, the equipment elevator begins to descend. After 28 seconds, the elevator for the miners begins to descend. What is the position of each elevator relative to the surface after another 14 seconds? At that time, how much deeper is the elevator for the miners?



Assessment Practice

22. Use the number line to find $-35 - 2$.



$-35 - 2 = \square$

23. Which of these expressions has the same product as $(-6) \cdot 7$? Select all that apply.

$(-6) \cdot (-14)$
 $16 \cdot (-3)$
 $-6 \cdot (-7)$
 $7 \cdot (-6)$
 $14 \cdot (-3)$

44 1-6 Multiply Integers

Handwritten work for 21:

$$\begin{array}{r} 112 \\ + 56 \\ \hline 168 \end{array}$$
 Total Depth 168 ft

Handwritten work for 23:

$$\begin{array}{r} 14 \\ \times 15 \\ \hline 70 \\ + 140 \\ \hline 210 \end{array}$$
 subtract

